

NVR FULL REVISION

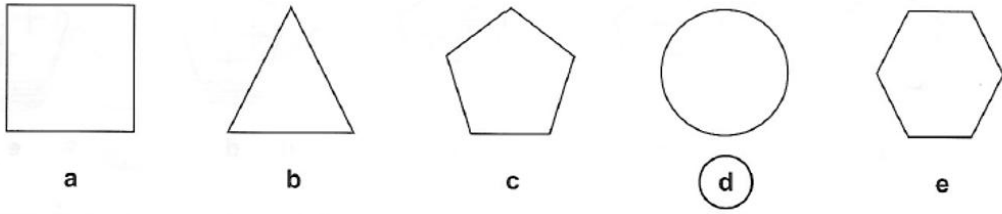
ODD ONE OUT :

In each of the following questions you will find five figures.

You must find the one figure from the five that is **most unlike** the rest.


Circle the correct letter below, or mark the appropriate box on the multiple choice answer sheet.

**Example:**




**Answer: d**

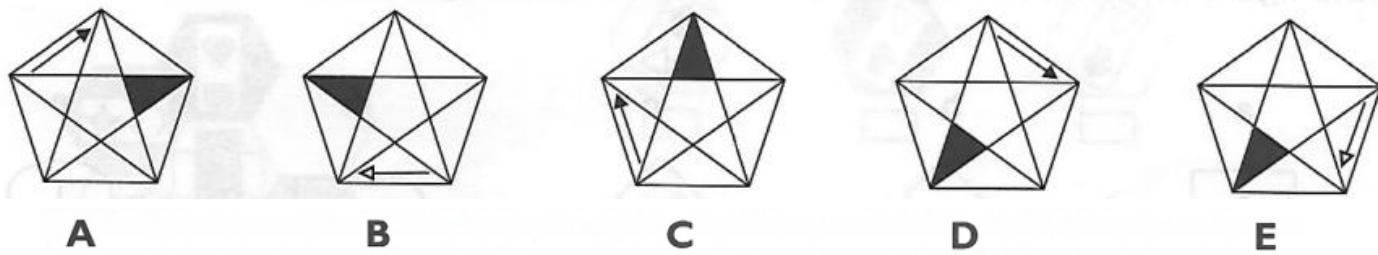
1.



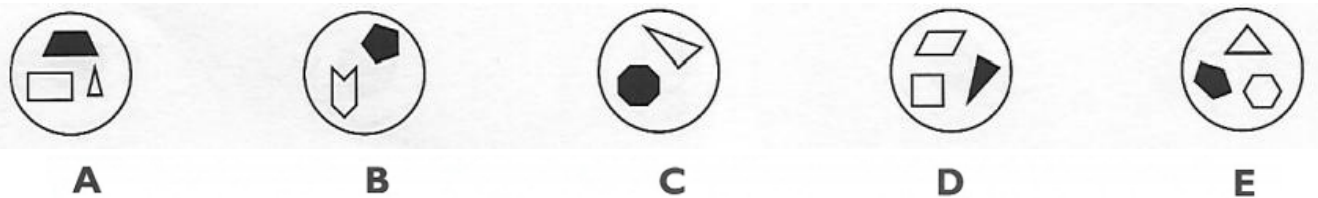
2.



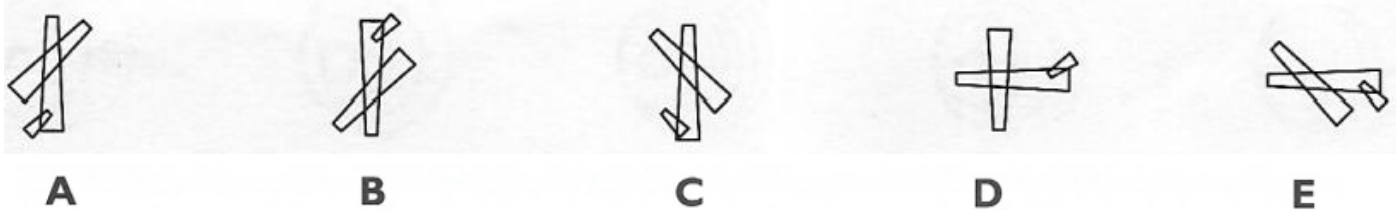
3.



4.



5.



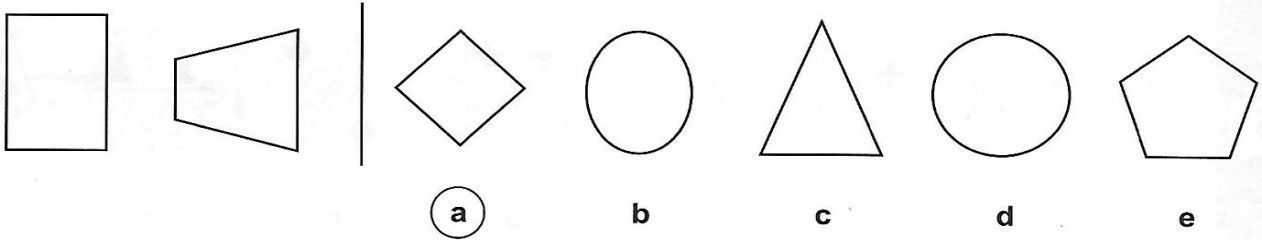
NVR FULL REVISION

SHAPE BELONGS TO THE GROUP:

In the following questions there are two shapes on the left-hand side that are similar in some way. On the right-hand side there are five other shapes.

You must decide which **one** of the five shapes is most like the pair on the left side of the page. Circle the letter under the shape, or mark the appropriate box on the multiple choice answer sheet.

**Example**



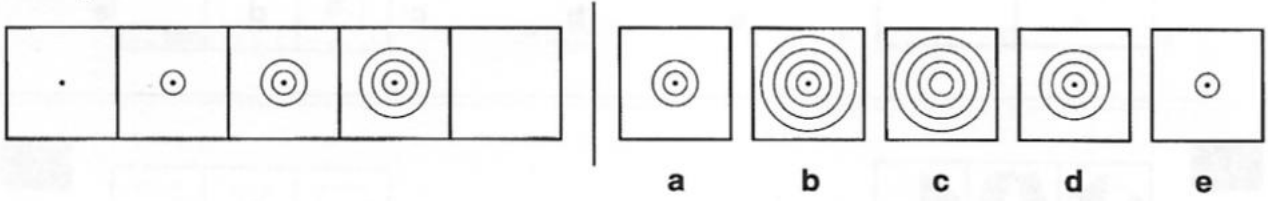
Answer: a

6. 
  
A B C D E
7. 
  
A B C D E
8. 
  
A B C D E
9. 
  
A B C D E
10. 
  
A B C D E

SERIES OR SEQUENCE:

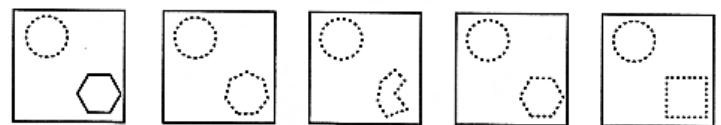
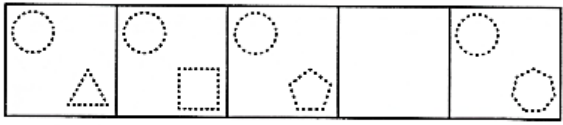
To the left in each of the lines below there are five squares arranged in order. One of these squares has been left empty. Find which one of the five squares on the right should take the place of the empty square and mark its letter on your answer sheet.

Example

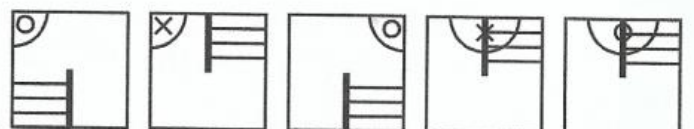
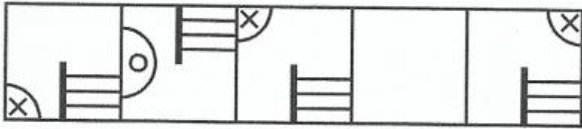


Answer: b


11.





12.



13.



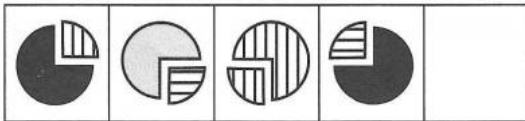
14.



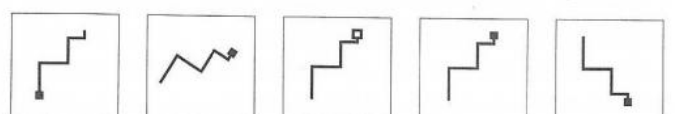
15.



16.



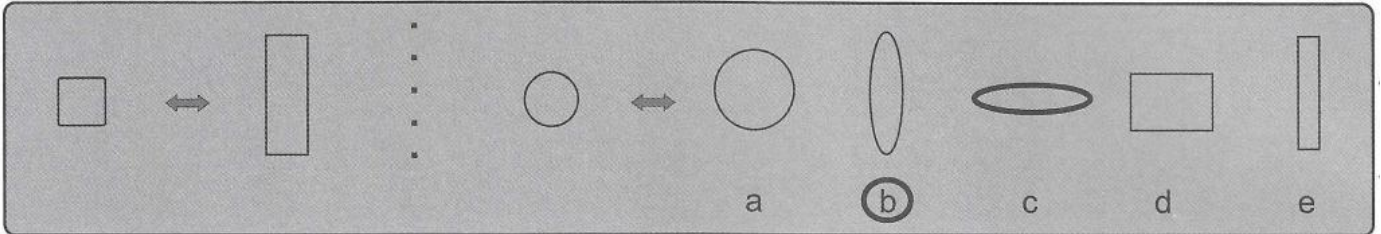
17.



**ANALOGY:**

In these questions there are two figures on the left separated by an arrow. You have to decide how these two figures are related. There is a third figure which is separated by an arrow from five further figures on the right. You have to decide which one of these five figures is related to the third figure in the same way as the first two figures are related to each other. Mark your choice on the answer sheet.

**Example**



- 18.
- 19.
- 20.
- 21.
- 22.
- 23.

**MATRICES:**

In these questions there is a grid on the left with 4 or 9 squares one of which has been left blank. Look at the figures on the right and decide which one would best complete the pattern in the grid. Mark your choice on the answer sheet.

**Example**

a	<b>b</b>	c	d	e

24.


a	b	c	d	e

25.


a	b	c	d	e

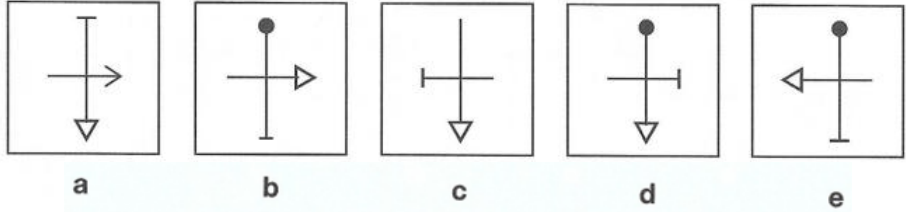
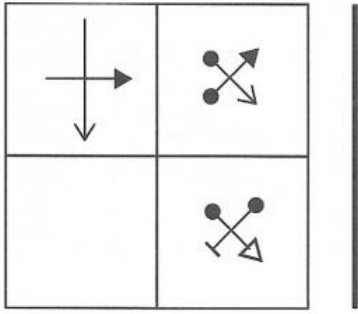
26.


a	b	c	d	e

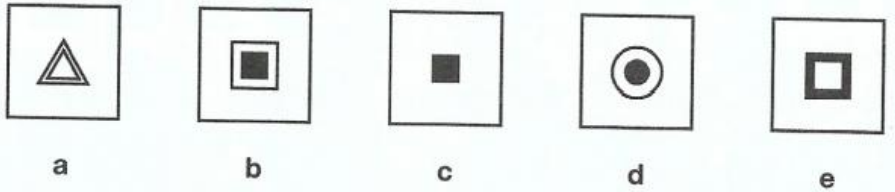

27.


a	b	c	d	e

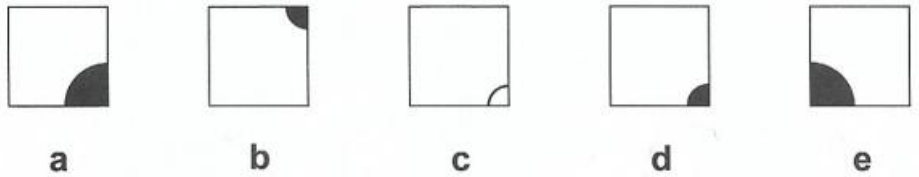
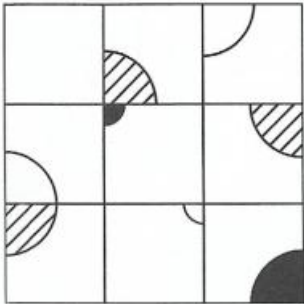
28.



29.



30.

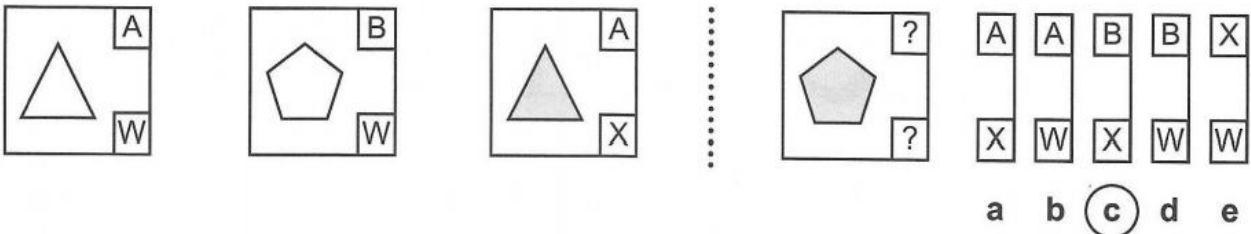


**CODE:**

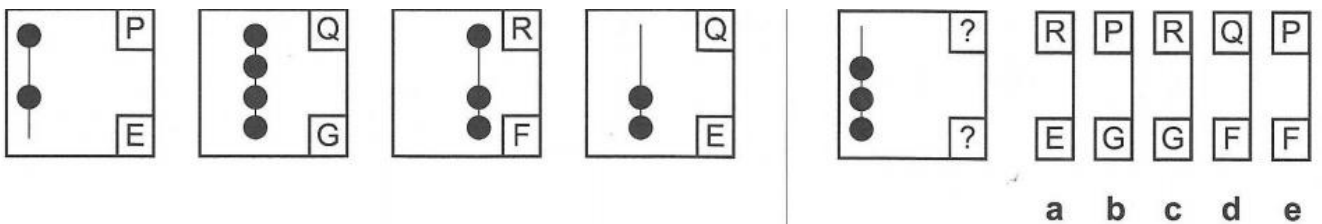
To answer the following questions you will need to work out a code. In the boxes to the left of the page are shapes and code letters. The top letter in each box refers to one aspect of the shape, the bottom letter goes with another. You need to decide how the letters and shapes go together.

Now look at the shape on the right hand side of the page. You must choose one of the pairs of code letters to fill the empty spaces and circle the letter below it, or mark the appropriate box on the multiple choice answer sheet.

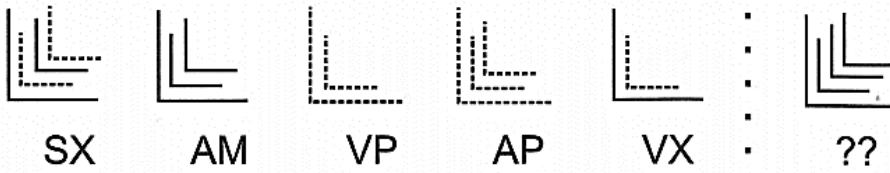
**Example 1:**



31.



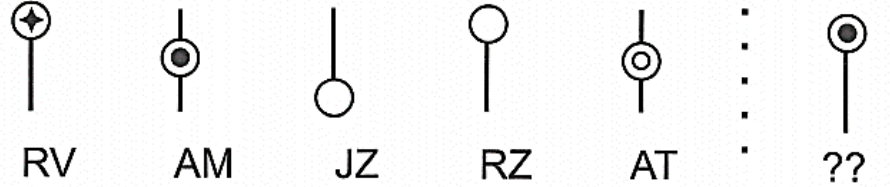
32.



SP AM SM TP AX  
a b c d e

SX AM VP AP VX ??

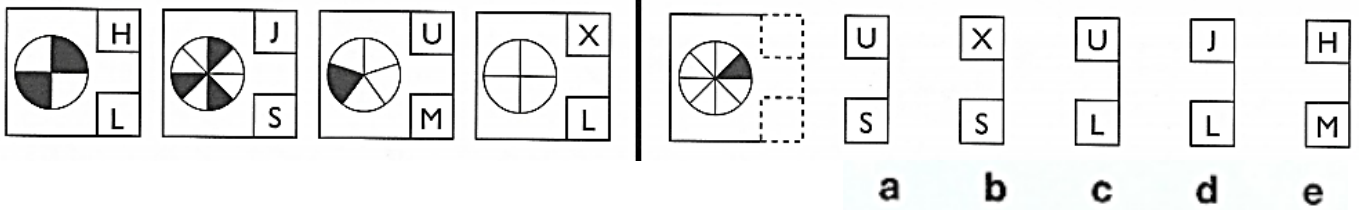
33.



RT RK AM RM JM  
a b c d e

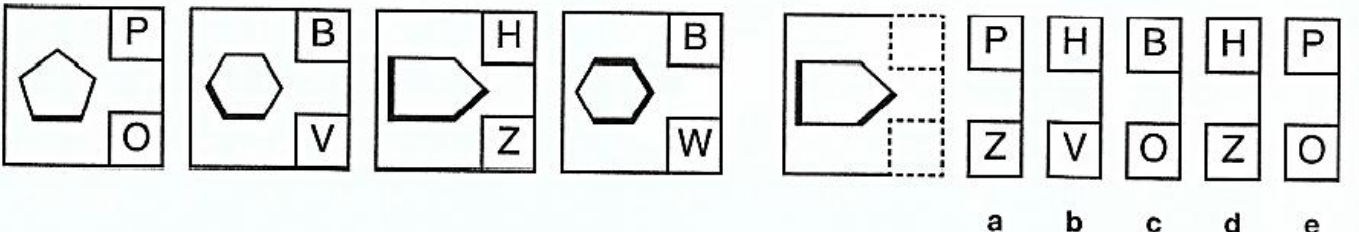
RV AM JZ RZ AT ??

34.



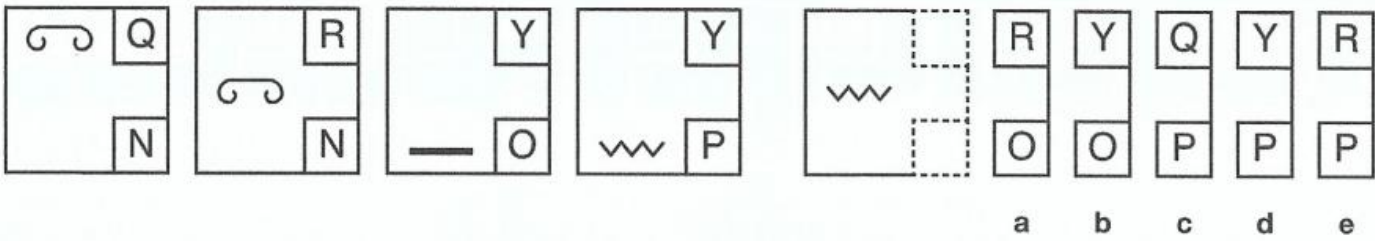
a b c d e

35.



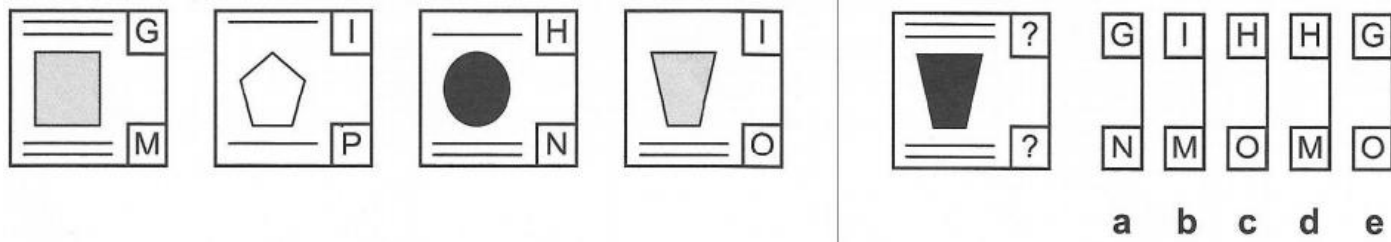
a b c d e

36.



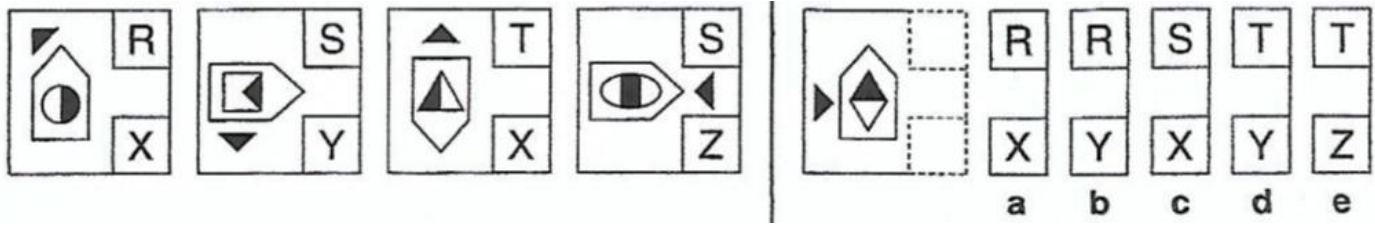
a b c d e

37.



a b c d e

38.



a b c d e

NVR FULL REVISION

ANSWERSE

E

1. D	21. A
2. E	22. B
3. D	23. B
4. E	24. B
5. C	25. E
6. A	26. E
7. B	27. B
8. E	28. C
9. B	29. E
10. B	30. D
11. D	31. E
12. E	32. C
13. A	33. D
14. D	34. A
15. C	35. B
16. C	36. E
17. D	37. E
18. B	38. A
19. E	
20. A	